









# woensdag 1 april 2020

| maandag   | dinsdag   | woensdag  | donderdag   | vrijdag  | zaterdag  | zondag  |
|---|---|---|---|--|---|---|
|  |  |  |  |  |  |  |
|   | gisteren  | <b>vandaag</b>  | morgen  |  |   |   |

## Wat moet ik vandaag doen?

1. Lezen: minstens **1 blad** in je leesboek.
2. Oefenen: maak de **witte blaadjes**, tot aan het volgende gekleurde blad.

★ **Klaar?** Je mag een blaadje kiezen uit het groene speelbundeltje!




|  |            |   |   |             |
|--|------------|---|---|-------------|
|  | bas neemt  | • | • | in de kar.  |
|  | de kat zit | • | • | de kar mee. |
|  | kim zit    | • | • | bij de wip. |

|  |                 |   |   |               |
|--|-----------------|---|---|---------------|
|  | tom zet de piek | • | • | in de boom.   |
|  | jet doet de sok | • | • | naar de boom. |
|  | mam kijkt       | • | • | op de boom.   |

|  |            |   |   |               |
|--|------------|---|---|---------------|
|  | de ree eet | • | • | van de boom.  |
|  | de vos zit | • | • | hipt een mus. |
|  | op een tak | • | • | bij de boom.  |


|  |           |   |   |              |
|--|-----------|---|---|--------------|
|  | joep rent | • | • | op de dijk.  |
|  | mam staat | • | • | bij de dijk. |
|  | sien is   | • | • | van de dijk. |

|  |             |   |   |             |
|--|-------------|---|---|-------------|
|  | teun zit    | • | • | op de hut.  |
|  | pien is     | • | • | in de hut.  |
|  | de mees zit | • | • | bij de hut. |


 maak een tekening die bij de bewerking past.

  streep het juiste aantal door of omkring.


 vul de uitkomst in.




$8 - 2 = \underline{6}$



$5 + 3 = \underline{8}$



$8 - 3 = \underline{5}$



$8 - 2 = \underline{6}$

 los op.

$4 + 3 = \underline{7}$

$8 - 2 = \underline{6}$

$4 - 1 = \underline{3}$

$4 + 4 = \underline{8}$

$8 - 1 = \underline{7}$

$7 - 2 = \underline{5}$

$3 + 2 = \underline{5}$



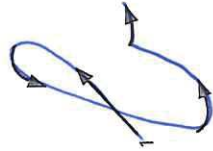


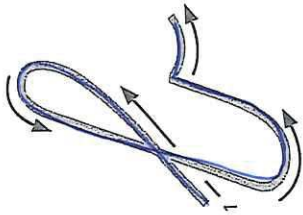

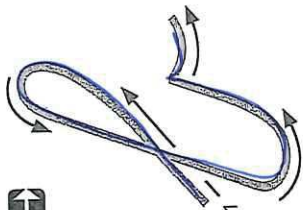
$7 - 5 = \underline{2}$

$6 + 2 = \underline{8}$

$4 + 3 = \underline{7}$

$6 - 2 = \underline{4}$

$7 + 1 = \underline{8}$







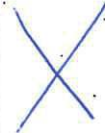
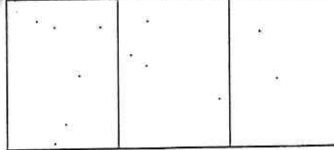
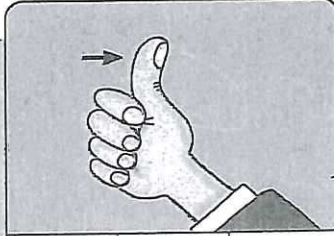
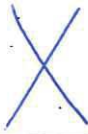

?

?

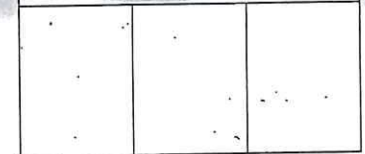
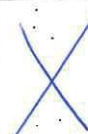


?



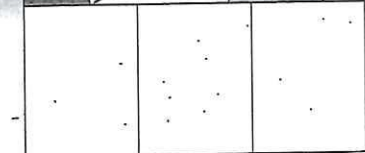
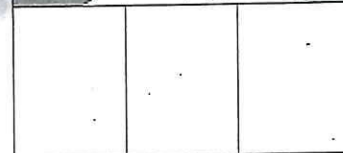

eu



eu



eu



eu

